






Worksheet on Data Handling for Class 2

Name: _____

Date: _____





Q1. The pictograph below shows the number of children who came to play in a park.


Day	Number of Children
Monday	
Tuesday	
Wednesday	
Thursday	

 = 1 child

- How many children came on Tuesday?
- On which day did the most children come?
- On which day did the fewest children come?
- How many more children came on Wednesday than on Thursday?
- What is the total number of children from Monday to Thursday?

Q2. Four friends collected seashells at the beach.

Friend	Seashells Collected
Arnav	
Nikhil	
Reena	
Payal	

 = 1 seashell

- Who collected the most seashells?
- Who collected the fewest?
- How many more did Nikhil collect than Payal?
- Who collected 6 seashells?
- What is the total number of seashells collected?

Answer Key

Q1.

- 5
- Wednesday
- Tuesday

d. 3

e. 28

Q2.

a. Nikhil

b. Payal

c. 5

d. Reena

e. 26



ORCHIDS[®]
The International School