


Grade 4 Math: Pictograph Practice Worksheet





Name: _____

Date: _____

Part A: Understanding Pictographs

1. Read the pictograph below and answer the questions.


The pictograph shows the number of fruits sold by a fruit seller in a week. Each  represents 3 fruits.

Fruit	Number of Fruits Sold
Apples	
Bananas	
Oranges	
Grapes	

Questions:





- How many apples were sold?
- How many bananas were sold?
- How many more grapes were sold than oranges?
- What is the total number of fruits sold by the seller?

Part B: Create a Pictograph

2. Create a pictograph based on the data given below. Each symbol  represents 1 student.

Favorite Sports	Number of Students
Basketball	6
Football	4
Tennis	2
Cricket	8

Draw the pictograph here:

Favorite Sports	Number of Students
Basketball	
Football	
Tennis	
Cricket	

Part C: Answer Based on the Pictograph You Created

3. Answer the questions below based on the pictograph you created.

- Which sport is the most popular?
- Which sport is the least popular?
- How many students like basketball and cricket combined?
- How many more students like cricket than tennis?

— BE CHAMPION —