


Grade 4 Math: Pictograph Practice Worksheet




Name: _____

Date: _____

Part A: Understanding Pictographs

1. Read the pictograph below and answer the questions.


The pictograph shows the number of different types of books sold by a bookstore in a month. Each  symbol represents 5 books.

Type of Book	Number of Books Sold
Fiction	
Non-fiction	
Comics	
Magazines	

Questions:





- How many fiction books were sold?
- How many non-fiction books were sold?
- How many more magazines were sold than comics?
- What is the total number of books sold by the bookstore?

Part B: Create a Pictograph

2. Create a pictograph based on the data given below. Each symbol  represents 1 chocolate bar.**

Chocolate Type	Number of Chocolate Bars Sold
Dark Chocolate	7
Milk Chocolate	5
White Chocolate	3
Hazelnut Chocolate	6

Draw the pictograph here:

Chocolate Type	Number of Chocolate Bars Sold
Dark Chocolate	 .
Milk Chocolate	
White Chocolate	
Hazelnut Chocolate	

Part C: Answer Based on the Pictograph You Created

3. Answer the questions below based on the pictograph you created.**

- Which type of chocolate is the most popular?
- Which type of chocolate is the least popular?
- How many more dark chocolate bars were sold than white chocolate bars?
- What is the total number of chocolate bars sold?

— BE CHAMPION—