


Grade 4 Math: Pictograph Practice Worksheet (Easy)





Name: _____

Date: _____

Part A: Understanding Pictographs

1. Read the pictograph below and answer the questions.


The pictograph shows the number of different animals at a zoo. Each  represents 2 animals.

Animal	Number of Animals
Lions	
Giraffes	
Elephants	
Monkeys	

Questions:





- How many lions are there at the zoo?
- How many giraffes are there at the zoo?
- How many more monkeys are there than elephants?
- What is the total number of animals at the zoo?

Part B: Create a Pictograph

2. Create a pictograph based on the data given below. Each symbol  represents 4 cookies.

Type of Cookie	Number of Cookies Sold
Chocolate Chip	16
Oatmeal	12
Sugar	8
Peanut Butter	4

Draw the pictograph here:

Type of Cookie	Number of Cookies Sold
Chocolate Chip	
Oatmeal	
Sugar	
Peanut Butter	

Part C: Answer Based on the Pictograph You Created

3. Answer the questions below based on the pictograph you created.

- a) Which type of cookie is the most popular?
- b) Which type of cookie is the least popular?
- c) How many more chocolate chip cookies were sold than peanut butter cookies?
- d) What is the total number of cookies sold?

— BE CHAMPION —